



TIME

Page	Description
1	am/pm time, 24 hour clock, clock face
2	am/pm time, 24 hour clock, time in words
3	am/pm time, 24 hour clock, minutes to hours conversions
4	am/pm time, 24 hour clock, draw hands on a clock face


Fill in the boxes to the right of each clock




Asleep			Lunch	
am/pm	24 hour		am/pm	24 hour




Waking Up			After tea	
am/pm	24 hour		am/pm	24 hour



At school			Asleep	
am/pm	24 hour		am/pm	24 hour



School just started			Watching TV	
am/pm	24 hour		am/pm	24 hour



Asleep			At school	
am/pm	24 hour		am/pm	24 hour

1

	Words	am/pm	24 hour
	Quarter to seven in the morning	6.45 am	06:45
1	ten past eight in the evening		
2		2.35 pm	
3			21:45
4	twenty five to seven in the evening		
5		3.10 am	
6			12:05
7	eight minutes past midnight		
8		5.50 pm	
9			15:15
10			00:30

Time Starter

1) How many minutes in $2\frac{1}{4}$ hours?

2) 205 minutes in hours and minutes.

3) 3 am in 24 hour clock.

4) 3 pm in 24 hour clock.

5) 07:00 in am/pm time


6) 21:00 in am/pm time

7) 00:00 in am/pm time

8) Midday in am/pm time.

9) 4.25 pm plus 2 hours 40 mins
is what time?

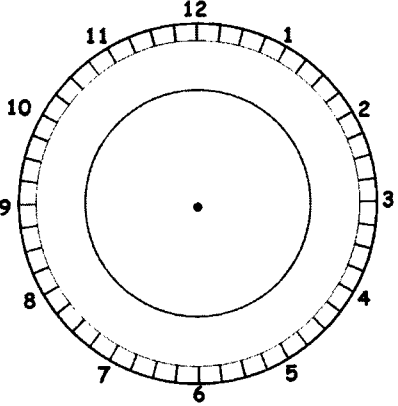
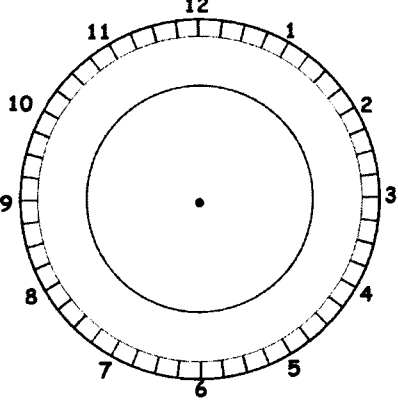
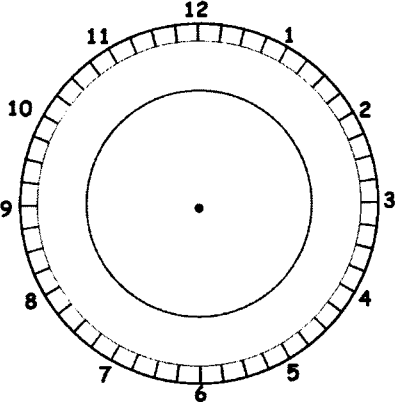
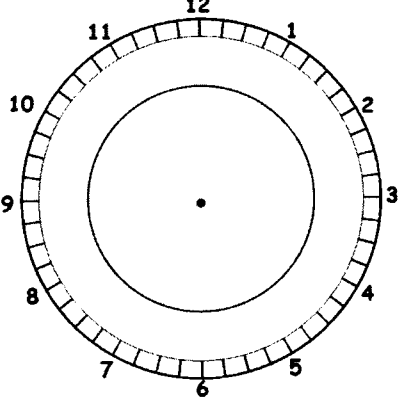
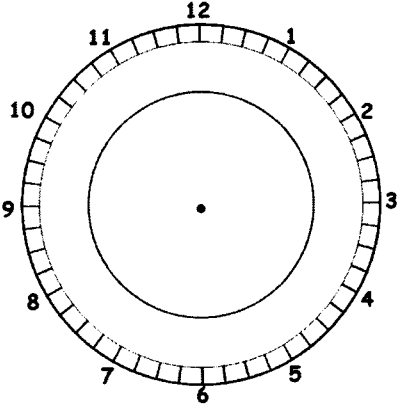
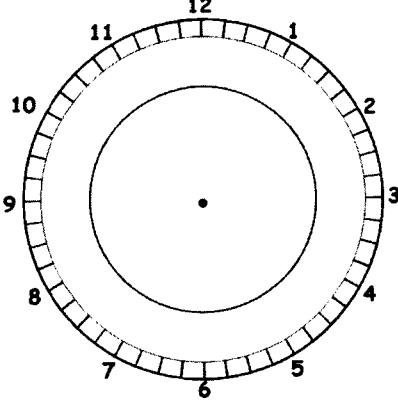
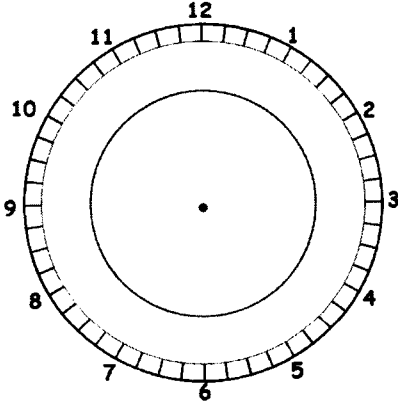
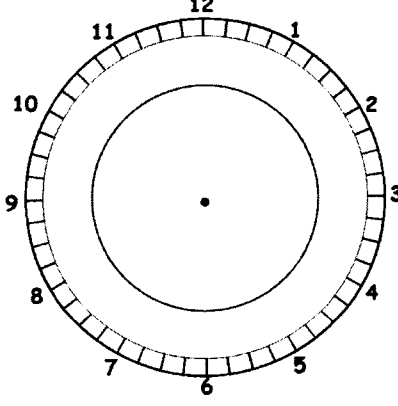
10) 2.45 pm to 6.05 pm is how
long?



Draw the hands on the clocks

Remember that the hour hand moves between whole hours. E.g. at 4.30 it is halfway between 4 and 5

Remember the minute hand is longer than the hour hand

	am/pm time 7 am 24 hour time		am/pm time 4.15 pm 24 hour time
	am/pm time 08:30		am/pm time 18:45
	am/pm time 11:45		am/pm time 20:15
	am/pm time 2 pm 24 hour time		am/pm time 10.30 pm 24 hour time