



TIME

Page	Description
1	am/pm time, 24 hour clock, clock face
2	am/pm time, 24 hour clock, time in words
3	am/pm time, 24 hour clock, minutes to hours conversions
4	am/pm time, 24 hour clock, draw hands on a clock face


Fill in the boxes to the right of each clock




Asleep			Lunch	
am/pm	24 hour		am/pm	24 hour
1 am	01:00		1 pm	13:00




Waking Up			After tea	
am/pm	24 hour		am/pm	24 hour
7 am	07:00		7 pm	19:00



At school			Asleep	
am/pm	24 hour		am/pm	24 hour
10 am	10:00		10 pm	22:00



School just started			Watching TV	
am/pm	24 hour		am/pm	24 hour
8:30 am	08:30		8:30 pm	20:30



Asleep			At school	
am/pm	24 hour		am/pm	24 hour
2:15 am	02:15		2:15 pm	14:15

	Words	am/pm	24 hour
	Quarter to seven in the morning	6.45 am	06:45
1	ten past eight in the evening	8.10pm	20:10
2	Twenty five to three in the afternoon	2.35 pm	14:35
3	Quarter to 10 in the evening	9.45pm	21:45
4	twenty five to seven in the evening	6.35pm	18:35
5	Ten past three in the morning	3.10 am	03:10
6	Five minutes past midday (twelve)	12.05pm	12:05
7	eight minutes past midnight	12.08am	00:08
8	ten to six in the evening	5.50 pm	17:50
9	Quarter past three in the afternoon	3.15pm	15:15
10	Half past midnight	12:30am	00:30

These are examples of correct word answers. There are variations.

Time Starter

1) How many minutes in $2\frac{1}{4}$ hours?
135 mins

2) 205 minutes in hours and minutes.
3 hours 25 mins.

3) 3 am in 24 hour clock. 03:00

4) 3 pm in 24 hour clock. 15:00

5) 07:00 in am/pm time 7 am


6) 21:00 in am/pm time 9 pm

7) 00:00 in am/pm time 12 am

8) Midday in am/pm time. 12 pm.

9) 4.25 pm plus 2 hours 40 mins
is what time? 7.05 pm

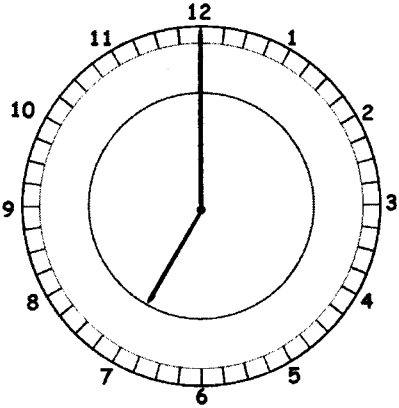
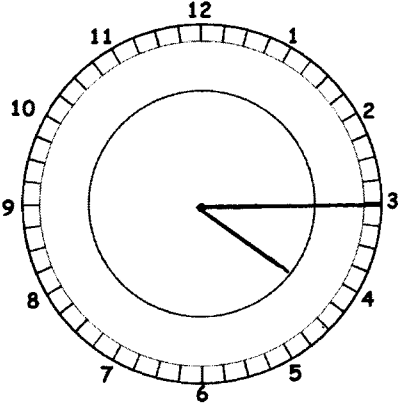
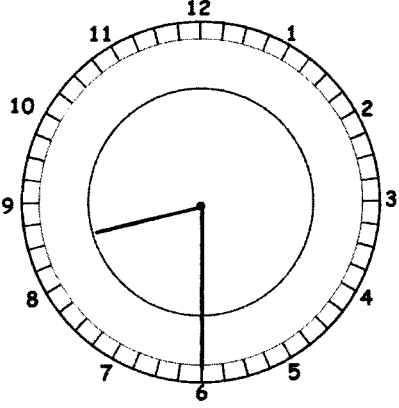
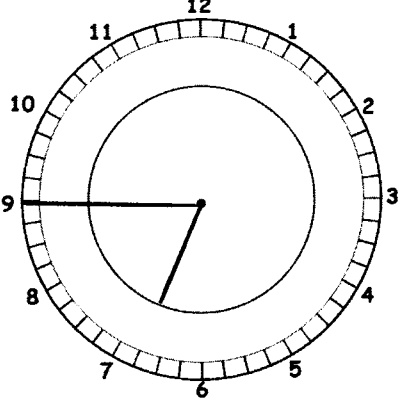
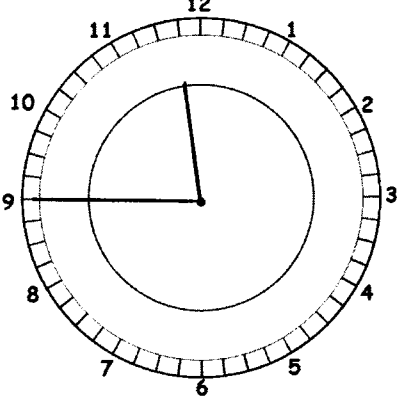
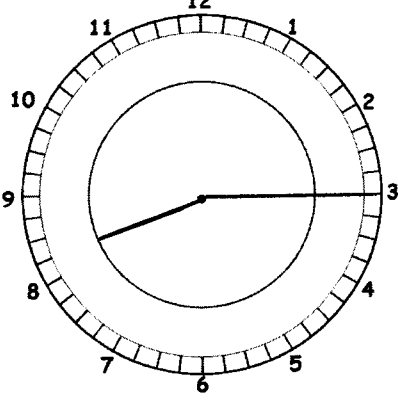
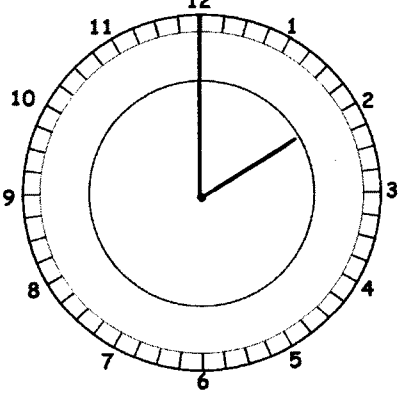
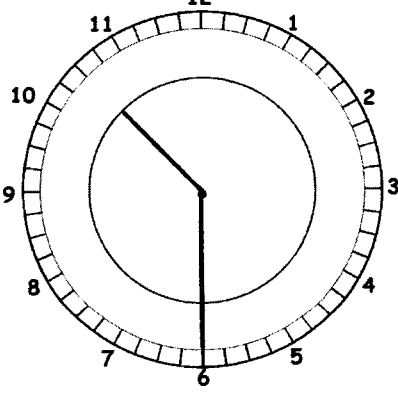
10) 2.45 pm to 6.05 pm is how
long? 3 hours 20 mins.



Draw the hands on the clocks

Remember that the hour hand moves between whole hours. E.g. at 4.30 it is halfway between 4 and 5

Remember the minute hand is longer than the hour hand

	<p>am/pm time</p> <p>7 am</p> <p>24 hour time</p> <p>07:00</p>		<p>am/pm time</p> <p>4.15 pm</p> <p>24 hour time</p> <p>16:15</p>
	<p>am/pm time</p> <p>8:30am</p> <p>24 hour time</p> <p>08:30</p>		<p>am/pm time</p> <p>6.45pm</p> <p>24 hour time</p> <p>18:45</p>
	<p>am/pm time</p> <p>11.45am</p> <p>24 hour time</p> <p>11:45</p>		<p>am/pm time</p> <p>8.15pm</p> <p>24 hour time</p> <p>20:15</p>
	<p>am/pm time</p> <p>2 pm</p> <p>24 hour time</p> <p>14:00</p>		<p>am/pm time</p> <p>10.30 pm</p> <p>24 hour time</p> <p>22:30</p>